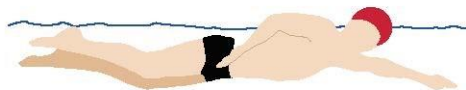
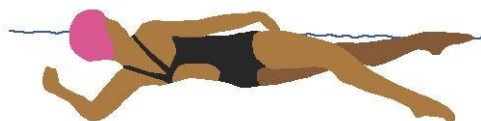


# All strokes


## Worksheet



David can swim a width in 30 seconds



Jane can swim a width in 20 seconds



Emma can swim a width in 35 seconds



Leroy can swim a width in 25 seconds

Question	Answer
1. Is Jane swimming front crawl or backstroke?	
2. Which stroke is Leroy swimming?	
3. Which stroke is Emma swimming?	
4. Which stroke is David swimming?	
5. Who is swimming with their feet turned out?	
6. When David is swimming what position are his ears in?	
7. Who is kicking his or her legs up and down, together?	
8. Who is kicking his or her legs up and down, one at a time?	
9. Who can swim a width fastest?	
10. Who is the slowest swimmer?	
11. What is the time difference between Jane and David?	
12. How much faster is Jane than Emma?	
13. How much faster is Leroy than David?	

